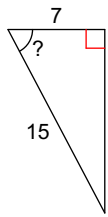


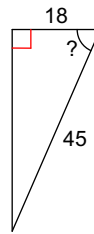
Rapports Trigonométriques

Trouve l'angle indiqué

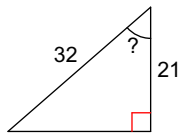
1)



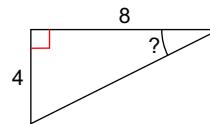
2)



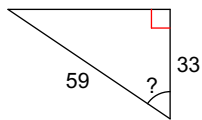
3)



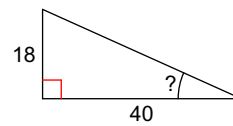
4)



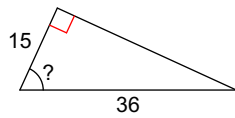
5)



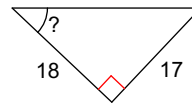
6)



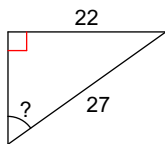
7)



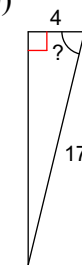
8)



9)

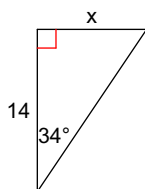


10)

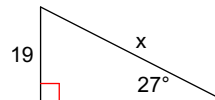


Trouve la côté qui manque. Arrondis au dixième près.

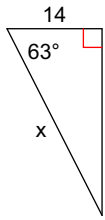
11)



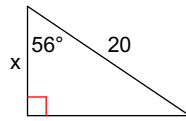
12)



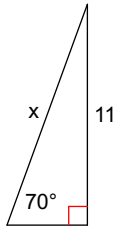
13)



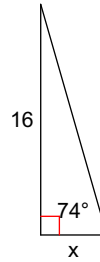
14)



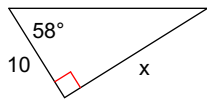
15)



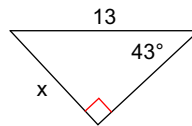
16)



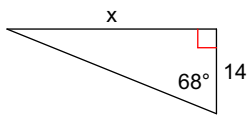
17)



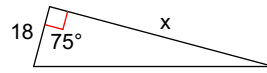
18)



19)



20)



Answers to Rappports Trigonométriques (ID: 1)

1) 62°

5) 56°

9) 55°

13) 30.8

17) 16.0

2) 66°

6) 24°

10) 76°

14) 11.2

18) 8.9

3) 49°

7) 65°

11) 9.4

15) 11.7

19) 34.7

4) 27°

8) 43°

12) 41.9

16) 4.6

20) 67.2